

QUADRILATERALS TOPIC TEST
FAMAT State Convention 2004

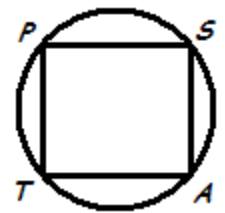
For all questions, choice **E** is **NOTA**, meaning
 "None Of These Answers."

Diagrams are not necessarily drawn to scale!

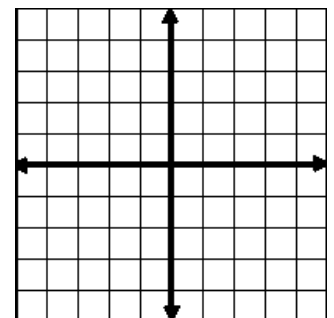
- A square has an apothem of 12. What is the area of the square?
 A) 72 B) 144 C) 288 D) 576 E) NOTA
- A quadrilateral has sides which measure $\frac{3}{4}$, $\frac{4}{5}$, $\frac{5}{6}$ and $\frac{7}{8}$. What is the perimeter of the quadrilateral?
 A) $\frac{7}{16}$ B) $\frac{19}{22}$ C) $\frac{15}{4}$ D) $\frac{391}{120}$ E) NOTA
- What is the sum of the exterior angles of a convex quadrilateral?
 A) 180° B) 360° C) 720° D) 1080° E) NOTA
- The midline of an isosceles trapezoid measures 12, and is a distance of 4 from the smaller base. What is the area of the trapezoid?
 A) 48 B) 64 C) 76 D) 96 E) NOTA
- Which statement is not necessarily true of a parallelogram?
 A) Its opposite sides are congruent.
 B) Its diagonals bisect each other.
 C) Its opposite angles are supplementary.
 D) Its opposite sides are parallel.
 E) NOTA

- A square with an area of 1600 is being shrunk, but in such a way that it always remains a square. First, it is shrunk so that its perimeter is reduced to 25% of the original perimeter. The resultant square is then shrunk so that its perimeter is reduced by 10%. What is the area of the square after all this reduction?
 A) 36 B) 81 C) 100 D) 360 E) NOTA

- Quadrilateral $PSAT$ is inscribed in the circle shown below. If $m\angle ASP = 94^\circ$ and $m\angle SAT = 80^\circ$, then what is $m\angle PTA$?
 A) 86° B) 87°
 C) 90° D) 100°
 E) NOTA



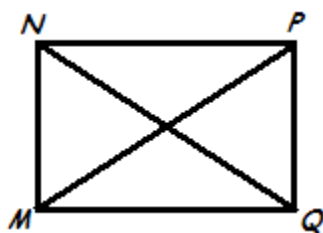
- A quadrilateral's sides are segments of the lines given by the equations $x = 0$, $y = 2$, $y = -4$, and $y = -2x + 4$. Its vertices are the points of intersection of the lines. What is the area of the quadrilateral?
 (NOTE: The point $(0, 4)$ is not a vertex of the quadrilateral.)
 A) 15 B) 18
 C) 21 D) 24
 E) NOTA



- What is the product of the lengths of the diagonals of a rectangle which has dimensions of 10 and 20?
 A) 200 B) 225 C) 300 D) 500 E) NOTA

10. In rectangle $MNPQ$, diagonals \overline{MP} and \overline{NQ} intersect at point X . If $MQ = 8$ and $MP = 10$, then what is the value of $(NX + PQ)$?

- A) 11 B) 13
C) 16 D) 18
E) NOTA



11. A circle with a diameter of 3 is inside of a rectangle with dimensions 8 and 10 as shown below. What is the area of the shaded region, rounded to the nearest integer? (Use $\pi = 3.14$)

- A) 52 B) 61
C) 71 D) 73
E) NOTA

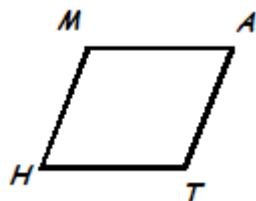


12. A length of fencing is to be used to enclose a quadrilateral-shaped area. Most specifically, what quadrilateral must be made to ensure that the largest area possible is enclosed?

- A) Isosceles Trapezoid B) Rectangle
C) Rhombus D) Square E) NOTA

13. Parallelogram $MATH$ has an area of 200. If $m\angle TAM = 50^\circ$ and $AM = 10$, then what is the length of \overline{AT} , rounded to the nearest tenth?

- A) 20.0 B) 22.4
C) 26.1 D) 31.1
E) NOTA

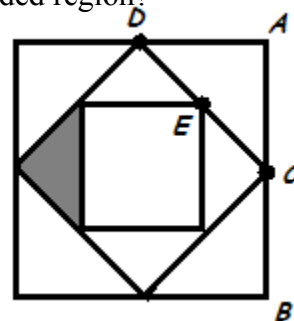


14. The product of the lengths of the diagonals of a square is 12. What is the area of the square?

- A) 6 B) 12 C) 24 D) 36 E) NOTA

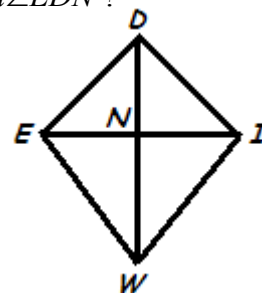
15. A square is inscribed inside of a square, which is inscribed inside of a third square, as shown below. $\overline{CB} \cong \overline{CA}$, $\overline{EC} \cong \overline{ED}$, and $AB = 20$. What is the area of the shaded region?

- A) 12.5 B) $12.5\sqrt{2}$
C) 25 D) 50
E) NOTA



16. In kite $WIDE$, $\overline{ID} \cong \overline{ED}$ and \overline{EI} intersects \overline{WD} at point N . If $m\angle WIN = 75^\circ$ and $m\angle NWI = 15^\circ$, then what is $m\angle EDN$?

- A) 15° B) 30°
C) 45° D) 60°
E) NOTA



17. One face of a right rectangular prism has an area of 6. Another face of the same prism has an area of 16. The volume of the prism is 48. What is the prism's surface area?

- A) 45 B) 70 C) 92 D) 144 E) NOTA

18. A rectangle R has a perimeter of 8. A rectangle Q has three times the length and four times the width of R . The perimeter of Q is 30. What is the sum of the lengths of R and Q ?

- A) 4 B) 5 C) 8 D) 12 E) NOTA

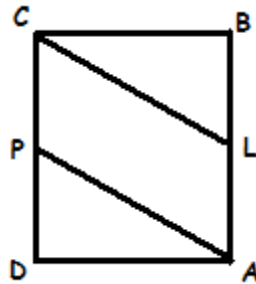
19. Which of the following three statements must be true?

- I. All rectangles have perpendicular diagonals.
- II. All trapezoids are concave.
- III. A diagonal in any rhombus bisects opposite angles of the rhombus.

- A) I only B) II only C) III only
 D) I and III only E) NOTA

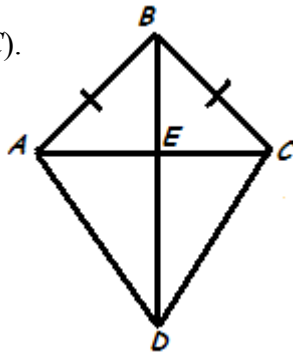
20. The vertices of parallelogram $CLAP$ lie on rectangle $ABCD$ as shown below. $CL = 17$, $CB = 15$, and $\overline{LP} \parallel \overline{AD}$. What is the area of parallelogram $CLAP$?

- A) 60 B) 120
 C) 136 D) 240
 E) NOTA



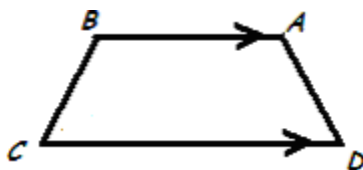
21. The area of kite $ABCD$ (shown below) is 252. $AC = 24$ and $BC = 13$. Diagonals \overline{AC} and \overline{BD} intersect at point E . Find the value of $(DE + DC)$.

- A) 16 B) $8 + 4\sqrt{3}$
 C) 36 D) 41
 E) NOTA



22. In the isosceles trapezoid $ABCD$, $BC = 6$, $AB = 8$, and $m\angle BCD = 30^\circ$. What is the measure of diagonal \overline{AC} , rounded to the nearest integer?

- A) 9 B) 14
 C) 15 D) 18
 E) NOTA



23. How many distinct squares with positive perimeters exist which satisfy the condition that the area of the square must equal its perimeter?

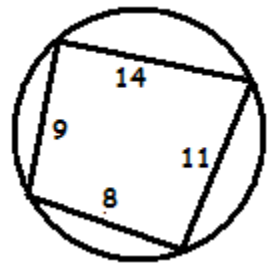
- A) 0 B) 1 C) 2 D) ∞ E) NOTA

24. A rhombus with a diagonal of 12 has an area of 21. What is the perimeter of the rhombus?

- A) 14 B) $4\sqrt{21}$ C) 25 D) $24\sqrt{2}$ E) NOTA

25. A quadrilateral is inscribed in a circle as shown below. The quadrilateral's side measurements are given in the diagram. What is the area of the quadrilateral, rounded to the nearest tenth?

- A) 104.5 B) 105.3
 C) 109.3 D) 110.0
 E) NOTA

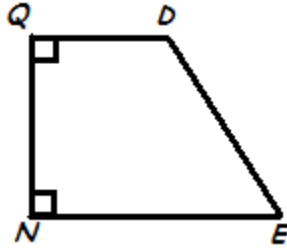


26. Rectangle $ABCD$ has an area of 45. Rectangle $WXYZ$ has an area of 80. $\square ABCD \sim \square WXYZ$. If the perimeter of rectangle $ABCD$ is 28, then what is the perimeter of rectangle $WXYZ$?

- A) $\frac{112}{3}$ B) $\frac{448}{9}$ C) $\frac{2102}{27}$ D) $\frac{7168}{81}$ E) NOTA

27. Trapezoid $QDEN$ (shown below) has an area of 512. If $QD = 2x + 8$, $QN = 3x - 5$, and $EN = 6x$, then what is the product $((QN)(QD))$?

- A) 180 B) 260
C) 352 D) 456
E) NOTA



28. In the quadrilateral $HARD$ shown below, $m\angle HDR = 115^\circ$ and $m\angle ARD = 120^\circ$. The following measurements are known to be accurate to the nearest tenth:
 $HA = 66.0$, $RD = 30.0$, $AR = 25.0$
What is the area of the quadrilateral $HARD$, rounded to the nearest integer?

- A) 1158 B) 1200
C) 1530 D) 1645
E) NOTA



29. How many distinct parallelograms exist with positive integral side lengths and perimeters less than 11?

- A) 6 B) 12 C) 21 D) 25 E) NOTA

30. There exist two isosceles trapezoids that have the same perimeter (P) and the same height (H). The first trapezoid has a base angle measuring 30° and an area A_1 . The second trapezoid has a base angle measuring 45° and an area A_2 .

If the ratio $\frac{A_1}{A_2}$ can be written in the form $\frac{aP - bH}{cP - dH}$, then find the value of $\frac{ab}{cd}$ and rationalize the result.

- A) $2(2 - \sqrt{3})(1 - \sqrt{2})$ B) $2(2 + \sqrt{3})(1 - \sqrt{2})$
C) $\sqrt{2}$ D) $\frac{1 - \sqrt{2}}{2}$ E) NOTA